



## Refraction Q

---



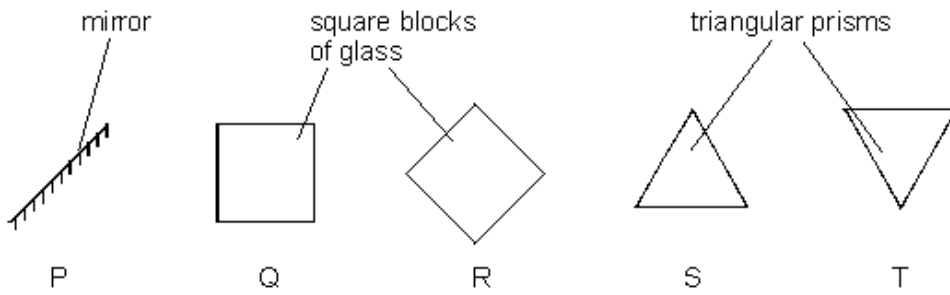
3 minutes



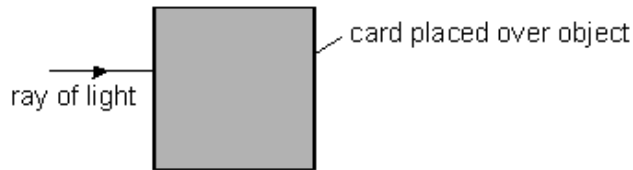
4 marks

---

**Q1.** The diagram below shows the shapes and positions of five glass objects.

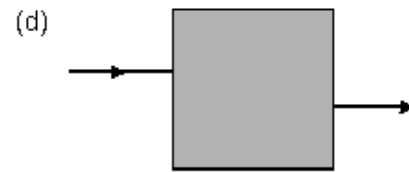
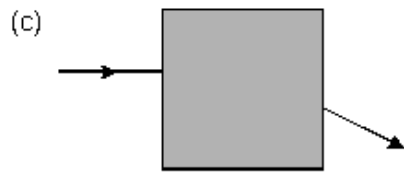
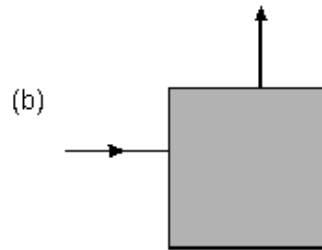
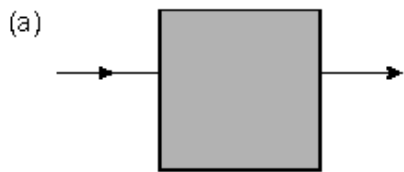
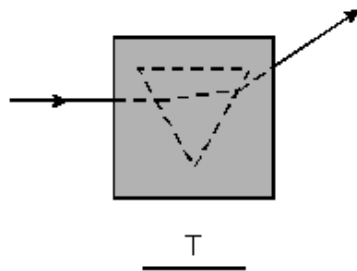


Harriet put a square of black card on top of each glass object. She shone a ray of red light onto each object.



The diagrams below show the rays of light going under the cards and coming out again. Which object is under each card? Write the correct letter below each diagram. One has been done for you.

4 marks



Maximum 4 marks

